



**1** Mention three goals of the United Nations (UN).

- 1. ....
- 2. ....
- 3. ....



**2** What are the two wars that took place in the last century?

- 1. ....
- 2. ....



**3** Which organ of the UN am I?

- 1. I'm a parliament of the nations.....
- 2. I solve disputes between countries.....
- 3. I carry out the administrative work of the UN.....



**4** List 2 permanent members of the Security Council.

- .....
- .....




**1**

**What is the most important Human Right in your opinion? Why?**

.....

.....



**2**

**List three of Human Rights.**

1. ....
2. ....
3. ....



**3**

**Put these words in meaningful sentences.**

1. **Freedom:**.....
2. **Relocation:**.....




**4 Draw a picture that shows ad example of discrimination.**

A large white rectangular area for drawing, set against a light green background.



**5 Define the word Discrimination.**

.....  
.....



**6 Why do you think discrimination is bad for people and countries?**

.....  
.....



**7 Mention three of the UN Conventions.**

1. ....
2. ....
3. ....



## Quiz (I) – Unit (I)

### 1 What are children Rights?

1. ....
2. ....
3. ....

### 2 Fill in the blanks with correct answer.

1. The Universal Declaration of Human Rights was adopted by the ..... in .....
2. This Declaration implies that recognizing human rights is the foundation of freedom, ..... and ..... in the world.

### 3 Mention what this sign is and one of its functions.



.....

.....



Student's Name .....

## Quiz (I) – Unit (I)

### 3 Match each term to its definition.

Child abuse ●

● illness

Disease ●

● an extreme shortage of food by a population.

Famine ●

● the state of being safe from harm.

Security ●

● improper treatment of children.

# Watch the Video!



What are child rights?

<https://www.youtube.com/watch?v=VIBFLitBkco>



**What is the video talking about?**

.....

.....

.....

.....

.....

.....

.....



**1** Mention three main topics covered by the subject of Geography.

- 1. ....
- 2. ....
- 3. ....



**2** Define these two terms.

- 1. Absolute Location: .....
- 2. Relative Location: .....



**3** Describe the relative location of your house.

.....  
.....



**4** What is a place?

.....  
.....





**1** Give 2 examples of how people change the geography of the places where they live.

- 1. ....
- 2. ....



**2** Why is transportation important?

.....

.....

.....

.....



**3** Mention the modes of transportation.

- 1. ....
- 2. ....
- 3. ....
- 4. ....



**4** What are the modes of communication?

.....

.....



**5 Draw all road transportations you know.**

A large white rectangular area for drawing, surrounded by a pink border.



## Quiz (2) – Unit (2)

### 1 Define Geography.

.....

.....

### 2 Use the following map of Jordan to find its boundaries.



The boundaries of Jordan are:

.....

.....



Student's Name .....

## Quiz (2) – Unit (2)

3 Match each term to its picture.

Water transportation ●



Air transportation ●



Rail transportation ●



# Watch the Video!



<https://www.youtube.com/watch?v=vSkiXFHHI6Q>



**What is the video talking about?**

.....

.....

.....

.....

.....

.....

.....

.....



## Quiz (2) – Unit (2)

### 4 Match each term to its definition.

- |                    |   |  |
|--------------------|---|--|
| Region             | • | • an area inhabited by people who have one or more cultural traits in common               |
| Regional geography | • | • the study of patterns that shape human interaction with their environments               |
| Physical geography | • | • the study of the geography of regions as an Earth science                                |
| Human geography    | • | • areas of the planet that are easily distinguishable from space, which are land and water |
| Cultural region    | • | • an area that shares common natures and human characteristics                             |
| Global regions     | • | • a branch of geography that studies regions of all sizes across the planet Earth          |



1 What is meant by the following terms?

1. The Equator: .....

2. Latitudes: .....

3. Greenwich: .....



2 List 3 major latitudes and their degrees.

1. ....

2. ....

3. ....



3 Mention the difference between Longitude and Latitude.

.....

.....



**4** Where do the Longitudes meet?

.....

.....



**5** How many Longitudes are there?

.....

.....





## Quiz (3) – Unit (3)

### I Fill in the blanks with correct answer:

1. How much is the distance between the two lines of latitudes?

.....

2. Latitudes move towards.....to.....

3. Where is the maximum distance located between the Longitudes?

.....

4. The number of the western Longitudes to the Greenwich Line is.....

### 2 When determining the astronomical location to a certain state , what are the correct steps that should be followed to specify the location?

1. ....

2. ....

3. ....

4. ....

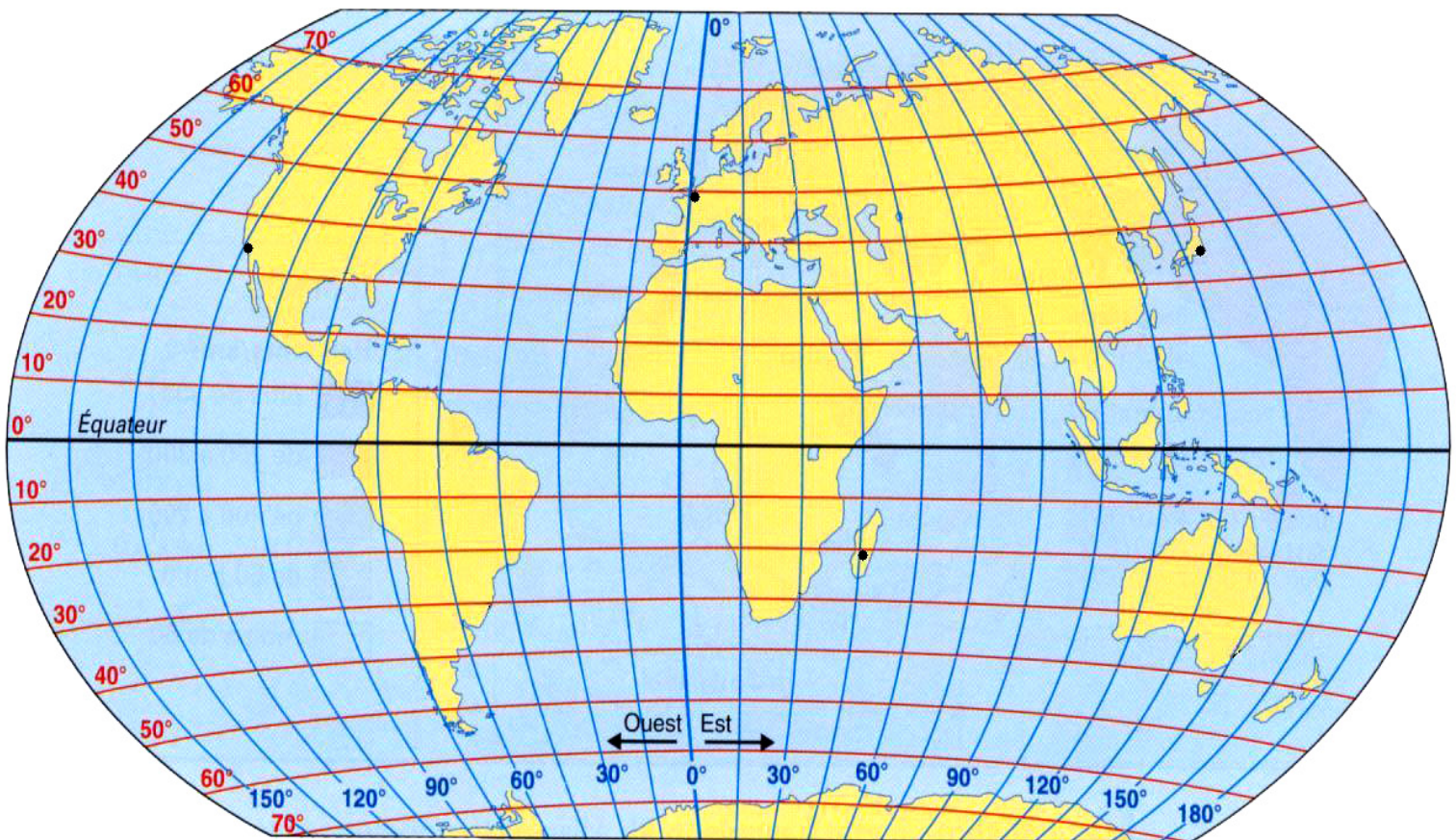


Student's Name .....

## Quiz (3) – Unit (3)

**3** Look at the attached figure and locate the following points.

1. 40 north and 40 west.
2. 30 south and 20 west.
3. The confluence of the Equator and Greenwich lines.



# Watch the Video!



<https://www.youtube.com/watch?v=MSA88mmFuyE>



**What is the video talking about?**

.....

.....

.....

.....

.....

.....

.....



**1** List 4 primary sources.

- 1. ....
- 2. ....
- 3. ....
- 4. ....



**2** What is the difference between a primary source and a secondary source?

.....  
.....



**3** Define archaeology and what it studies.

.....  
.....



**4** List 2 material remains of previous human societies which archaeologists study?

1. ....

2. ....



**5** When did the development of agriculture take place?

.....

.....



**1 Fill in the blanks with the suitable word:**

1. Herodotus was a.....who lived in the ..... century B.C. He is known as the " father of..... "
2. His masterpiece is..... .
3. He was born in.....in 1332 A.D.
4. Ibn Khaldoun was a famous.....historian.



**2 Why did people start to settle down?**

1. ....
2. ....



**3 Mention 3 ancient civilizations.**

1. ....
2. ....
3. ....



**4 How did trade develop?**

- .....
- .....



Student's Name .....

## Quiz (4) – Unit (4)

**1** Give an example of a secondary source.

.....  
.....

**2** How did the invention of the plow change the people's way of living?

.....  
.....

**3** List 3 reasons to explain why farming is so important in human's history.

1. ....
2. ....
3. ....

**4** Mention the stages of civilizations' development in order.

.....  
.....



## Quiz (4) – Unit (4)

### 5 Match each term to its definition.

- |                |   |
|----------------|---|
| Oral History ● | ● history that is told verbally – not written down.   |
| Literature ●   | ● things such as paintings, tools, and furniture that people used long ago.                       |
| Historian ●    | ● written works such as poetry, stories and novels.   |
| Culture ●      | ● the set of shared attitudes, goals and values that characterizes an institution / organization. |
| History ●      | ● events that happened in the past.   |
| Artifacts ●    | ● the specialist who studies the past in an academic and scientific way.                          |

### 6 Why were the people who lived 1000s of years ago called nomads?

.....

.....



Worksheet I

Unit 5

Lessons (1-3)



1 Fill in the blanks with the suitable word:

- 1. The act of buying and selling goods and services is called..... .
- 2. To avoid the difficulties of barter,..... evolved.
- 3. The.....were the first people to introduce the use of gold and silver coins around 650-600 B.C.



2 What is currency? And what is the currency of your country?

.....

.....



3 List the functions of money.

- 1. ....
- 2. ....
- 3. ....



**4** Fiat money has no innate value / guarantee. Explain that.

.....

.....



**5** Put these words in meaningful sentences:

1. Credit: .....
2. Plastic: .....
3. Fiat: .....



**1 Why did the wealthy deposit their gold with goldsmiths?**

1. ....

2. ....



**2 Define the word Interest.**

.....

.....



**3 What are the main benefits of banking?**

1. ....

2. ....



**4 How can we use the ATM in a safe way?**

1. ....

2. ....



**5** Draw an ATM machine.

A large white rectangular area for drawing an ATM machine, set against a light green background.



## Quiz (5) – Unit (5)

### 1 List 3 uses of the ATM.

1. ....
2. ....
3. ....

### 2 Fill the blanks with the suitable word:

1. In the middle ages ..... coins were the common currency.
2. Goldsmiths used to charge a ..... for their services and issue receipts, or gold ....., in the amount of the deposits.
3. The first bank notes were used in ..... in the 7<sup>th</sup> century.

### 3 What does this picture refer to?



.....

.....

.....

.....

.....




Student's Name .....

## Quiz (5) – Unit (5)

**4** Match each picture with the correct term:

Commodity money •



Credit money •



Electronic money •



# Watch the Video!



<https://www.youtube.com/watch?v=CqD3hnpjZBTM>



**What is the video talking about?**

.....

.....

.....

.....

.....

.....

.....



**1 What are the main reasons of pollution?**

1. ....

2. ....



**2 Use these words in meaningful sentences:**

1. **Pollution** : .....

2. **Environment** : .....



**3 List 3 sources of indoor air pollution.**

1. ....

2. ....

3. ....





**4** Mention 3 negative effects of air pollution.

- 1. ....
- 2. ....
- 3. ....



**5** Justify : why is water so important to us?

- 1. ....
- 2. ....
- 3. ....



**6** List 2 ways of decreasing land pollution.

- 1. ....
- 2. ....



## Quiz (6) – Unit (6)

### 1 List 3 sources of outdoor air pollution.

1. ....
2. ....
3. ....

### 2 Match each term to its definition.

- |                   |   |   |
|-------------------|---|---|
| Pollutant         | • | • gasoline not mixed with lead.   |
| Air pollution     | • | • a substance that makes air, water or land dirty.  |
| Unleaded gasoline | • | • a region in the atmosphere surrounding Planet earth protecting it against harmful sun radiation that can cause skin cancer. |
| Smog              | • | • a thick and dirty fog.  |
| Ozone layer       | • | • the chemicals and particulates that are introduced into the air by humans and do harm to living things,                     |



Student's Name .....

## Quiz (6) – Unit (6)

**3** What does this picture show ? Mention 3 ways of decreasing water pollution.



.....

.....

.....

.....

.....

.....

# Watch the Video!



<https://www.youtube.com/watch?v=5FWvbui6ook>



**What is the video talking about?**

.....

.....

.....

.....

.....

.....

.....

.....